

Name: _____

(This shows my own thinking.)

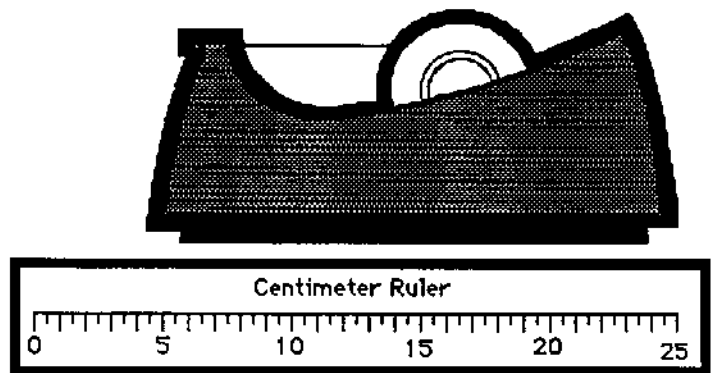
- ★★★★ 1. Wooden faces are made in a factory. The cost of making each shape is shown below. How much does it cost to make this face?

Any triangle costs 3¢
Any square costs 5¢
Any circle costs 6¢



Answer: _____ ¢

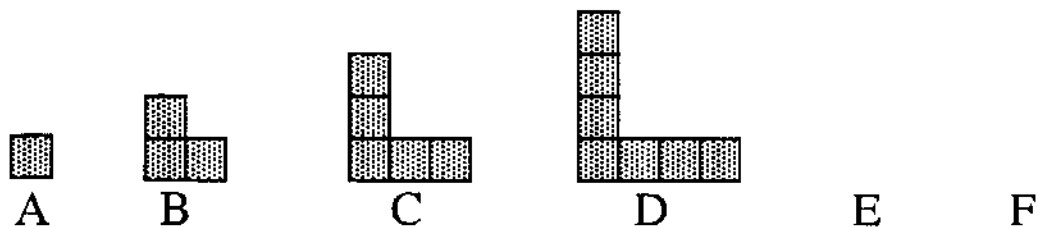
- ★★ 2. Lourdes said the tape dispenser was 25 centimeters long. But he did not start measuring at zero. How long is it?



Answer:

___ centimeters

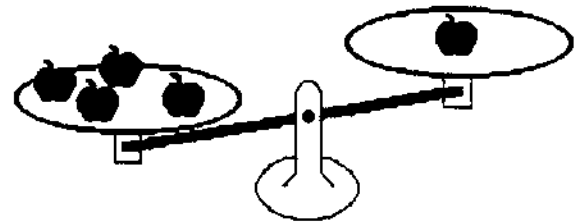
- ★★ 3. Follow the pattern. How many squares do you need to make E? _____ How many to make F? _____



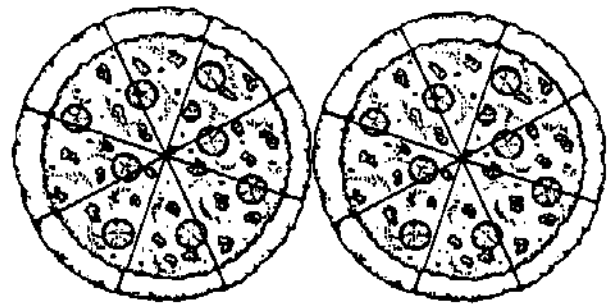
- ★ 4. I am thinking of a number. When you subtract 6 from the number, you get 13. What is my number?

Answer: _____

- ★ 5. Draw in enough apples to balance the scale.



- ★★★ 6. Four kids divided the 2 pizzas in a fair way. How many pieces did each get?



Answer: _____

- ★★ 7. Write all the 2-digit numbers you can make with these cards:

4

8

6

5

Write them in this box:
